

Winter Holiday Homework

Class- III

ENGLISH

Q.1 Look at the pictures. Imagine you want to grow up to be a policeman, Doctor, Teacher, Pilot, Scientist, Astronaut, OR anything that you dream of becoming. Write a 3-Paragraph essay about what you will do to make your dream come true. **Give your essay title.**



Include in :

- Paragraph 1: What a policeman, doctor, teacher, pilot, scientist or astronaut does, who your role model is and why you want to be just like her or him.
- Paragraph 2: Where you got the idea for this type of job, and what you like about it.
- Paragraph 3: How you will try and achieve your dream, and what you will do as a student to make your dream come true.

Criteria for evaluation

Creativity and Content – 2 marks Presentation- 2 marks Submission on time- 1 mark

*** Note – Participants of the Spell Bee Competition will prepare spellings from the content book provided by the teacher.**

HINDI

A-4 size sheet पर शरद ऋतु में पहने जाने वाली पोशाक व अपने पसंदीदा भोजन के चित्र बनाइए व नाम भी लिखिए।

मूल्यांकन के लिए मापदंड –

प्रस्तुतीकरण – 3 अंक

विषयवस्तु – 2 अंक

MATH

Q.1 Make an analogue clock showing proper numbers, hour and minute hands of a clock. And on a A-4 sheet list down any 5 activities that you do in a day along with the time according to the given table.

Day/Date	Timings	Activity	Duration

Criteria for evaluation

Submission on time – 1 Mark Accuracy – 2 Marks Creativity/Presentation – 2 Marks

SCIENCE

Q.1 Take fabrics (any 4) made from different fibres. Paste them on an A4 size sheet.

Write the kinds of clothes you can make with each fabric. Give reasons for your suggestion .

Criteria for evaluation

Creativity and Content – 2 marks Presentation- 2 marks Submission on time- 1 mark

SOCIAL SCIENCE

Q.1 Ask your grandparents about how they travelled when they were young. Draw the given format on A-3 size sheet & fill the details asked:-

	Me	My Grandparents when they were young
Places visited during holiday (any three)		
Vehicles used by [Vehicles that uses some kind of energy]		
Why was the journey special for		

On map of India locate these places.

Criteria for evaluation

Creativity and Content – 2 marks Presentation- 2 marks Submission on time- 1 mark

Note :- Learn UT- IV Syllabus.

Winter Holiday Homework

Class- IV

ENGLISH

Q.1. Pen down a Biography of your role model or an eminent personality whom you admire. Collect his/her various pictures and write about his/her life, career and achievements on an A-3 size sheet.

Q.2. Write the format of Formal Letter on a A-4 size sheet and write a formal letter to the editor as a newspaper to aware people about the problem of pollution and state solutions.

*** Note – Participants of the Spell Bee Competition will prepare spellings from the content book provided by the teacher.**

Criteria for evaluation

Creativity and Content – 2 marks Presentation- 2 marks Submission on time- 1 mark

HINDI

1. अभ्यास प्रश्न पत्र – 3 (व्याकरण पुष्प – पेज – 82)
2. प्रतिदर्श प्रश्न पत्र (व्याकरण पुष्प – पेज – 117)
3. शीतकालीन अवकाश का वर्णन करते हुए (ए-4) शीट पर अनुच्छेद लिखिए।

संकेत बिंदु – पसंदीदा भोजन , ठंड से बचाव के लिए ऊनी कपड़े , 'Joy of Giving' विद्यालय में मनाना

मूल्यांकन के लिए मापदंड –

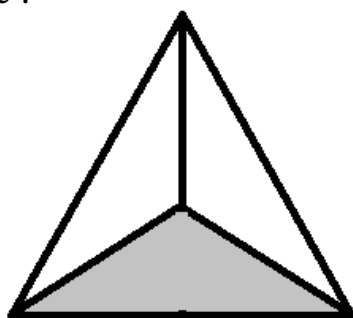
प्रस्तुतीकरण – 3 अंक , विषय संबंधी – 2 अंक

MATH

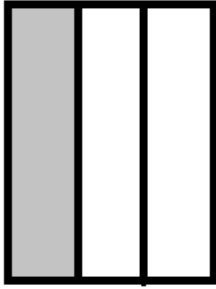
* Select any two favourite fractions using different cut outs. Show these fractions in four different ways. Also, write the name for each fraction on A-4 size sheet.

For Example :-


Fraction $\frac{1}{3}$



One third

$\frac{1}{3}$ 

One- third

 $\frac{3}{9}$ 

Three - ninth

Criteria for evaluation

Submission on time – 1mark

Accuracy - 2 marks

Variety of shapes – 1

Exclusivity- 1 mark

SCIENCE

Q.1. Collect and paste the weather report cutting from the newspaper to prove that weather changes within the season on a colorful A4 sheet.

OR

Search any five Indian satellites. Discuss the functions of each satellite and paste picture on a colorful A4 sheet.

Criteria for evaluation

Creativity and Content – 2 marks

Presentation- 2 marks

Submission on time- 1 mark

SOCIAL SCIENCE

Q.1. Collect samples of some types of soils that you can find in your neighbourhood using them make a model of 'Layer of Soil'. (Use transparent plastic glass or container)

Q.2. Collect as many things as you can that are made from animals. Make a list of things that can be used in place of these animals products on an A-3 size sheet. Make the list of things that can be used instead of these animal products.

❖ Do attached worksheet.

Criteria for evaluation

Creativity and Content – 2 marks

Presentation- 1 marks

Submission on time- 1 mark

Number of things collected – 1mark

Note :- Learn UT- IV Syllabus.

Winter Holiday Homework

Class- V

ENGLISH

- Q.1. Select a technology from the story 'Friends at the Sea Escape'. Describe ways that you would use it today to improve your life.
- Q.2. Collect five articles from the newspaper and magazines that are written for different purpose and put them all together in a scrapbook.
- * Note – Participants of the Spell Bee Competition will prepare spellings from the content book provided by the teacher.**

Criteria for evaluation

Creativity and Content – 2 marks Presentation- 2 marks Submission on time- 1 mark

HINDI

- ❖ अभ्यास प्रश्न पत्र – 3 हल करें (व्याकरण पुष्प पेज – 123)
- ❖ प्रतिदर्श प्रश्न पत्र – 1 हल करें। (व्याकरण पुष्प पेज – 155 – 157)
- ❖ शीतकाल में अपने पसंदीदा भोजन के कोई दो प्लैश कार्ड्स बनाइए।

मूल्यांकन के लिए मापदंड –

प्रस्तुतीकरण – 3 अंक , विषय संबंधी – 2 अंक

MATH

- * Take any five things (newspaper, magazines, shopping bag, laptop bag, door mat) etc of your choice and measure the area of the object using square tiles (2 cm x 2cm) and record your findings length, breadth and area of each object on A-4 size sheet.

Criteria for evaluation

Submission on time – 1mark

Accuracy - 2 marks

Variety of Objects – 1 mark

Methodology – 1 mark

SCIENCE

* B1-20 (Saving Energy) Prepare a colourful poster on conservation of energy.

OR

* B1-19 (Simple Machine) Make one simple machine with waste objects at home and write the various uses in the real-world.

Criteria for evaluation

Creativity and Content – 2 marks Presentation- 2 marks Submission on time- 1 mark

SOCIAL SCIENCE

Q.1. Design a poster on A-3 size sheet, telling people why it is important to choose the right person during an election.

Q.2. Find out about different tribes like **inuits**, **lapps** or **alents** who live in the Arctic Tundra Region, their occupation and how they live. Present your report on A-3 size sheet in the following format.

Tribe	Occupation	Food	Clothes
a)			
b)			
c)			

❖ **Do attached worksheet.**

Criteria for evaluation

Creativity and Content – 2 marks Presentation- 2 marks Submission on time- 1 mark

Note :- Learn UT- IV Syllabus.

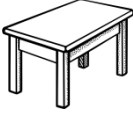



NAME: _____ **CLASS- IV** **DATE:** _____

Q.1. Fill in the blanks :-

- a) Animals will become _____ if they are hunted and killed.
- b) Animals are better protected in an _____.
- c) Elephant use _____ for food.
- d) _____ forest mostly have trees that stay green throughout the year.
- e) Mica is found in _____ and _____ states.

Q.2. The number of cars is increasing in every city. How will it affect our mineral resources? Which minerals will be affected ?

Q.3. Look at the pictures given below and write the raw material used to make these material. Also write the name of industries in which they are produced.

Picture	Raw- material	Name of Industries
		
		
		
		

Q.4. Match the following :-







- | | |
|-------------|----------------|
| a) Lion | i) Sunder bans |
| b) Tiger | ii) Assam |
| c) Rhino | iii) Kerala |
| d) Yak | iv) Rajasthan |
| e) Camel | v) Gujarat |
| f) Elephant | vi) Ladakh |

Q.2. Colour atleast one area with different kinds of forest on the map of India. And also write the name of the states where they are found.



MATHS

Q.1. Complete the skip counting to learn the tables :-

Skip count by 2	Skip count by 5	Skip count by 10	Skip count by 3	Skip count by 4	Skip count by 6
					
2	5	10	3	4	6
4	10	20			

Q.2. Let's have fun with tables. Learn the tables 2 to 10 to solve the given crosswords to master yourself in Math.

	x	1	=	2					
				x					
	x	1	=	3		x			
				=					
	x		=	48					

7	x	1	=	7					
x					x				
					9	x		= 36	
4	x	9	=		=				
				56					

Q.3. Let's learn more about the calendar

Today's Date

Digital Date

JANUARY	FEBRUARY	MARCH	APRIL	MAY	JUNE
JULY	AUGUST	SEPTEMBER	OCTOBER	NOVEMBER	DECEMBER

Last month was

This month is

Next month will be

MONDAY	TUESDAY	WEDNESDAY	THURSDAY	FRIDAY	SATURDAY	SUNDAY
--------	---------	-----------	----------	--------	----------	--------

Yesterday was

Today is

Tomorrow will be

<p>☆ ☆ ☆ ☆ ☆ ☆ ☆ ☆ ☆ ☆ ☆ ☆</p> <p>☆ Circle the current weather and ☆</p> <p>☆ draw the picture ☆</p> <p>☆</p> <table border="1" style="width: 100%;"> <tr><td>SUMMER</td></tr> <tr><td>FALL</td></tr> <tr><td>WINTER</td></tr> <tr><td>SPRING</td></tr> <tr><td>MONSOON</td></tr> </table> <p>☆ ☆ ☆ ☆ ☆ ☆ ☆ ☆ ☆ ☆ ☆ ☆</p>	SUMMER	FALL	WINTER	SPRING	MONSOON	<p>☆ ☆ ☆ ☆ ☆ ☆ ☆ ☆ ☆ ☆ ☆ ☆</p> <p>☆ Draw the picture of things ☆</p> <p>☆ we see and use in this season ☆</p> <p>☆</p> <p>☆ ☆ ☆ ☆ ☆ ☆ ☆ ☆ ☆ ☆ ☆ ☆</p>
SUMMER						
FALL						
WINTER						
SPRING						
MONSOON						

• Learn more about calendar :-

- i) How many days are there in a month ? _____
- ii) How many months are there in a year ? _____
- iii) How many days are there in a year ? _____

iv) How many months have 31 days ? _____

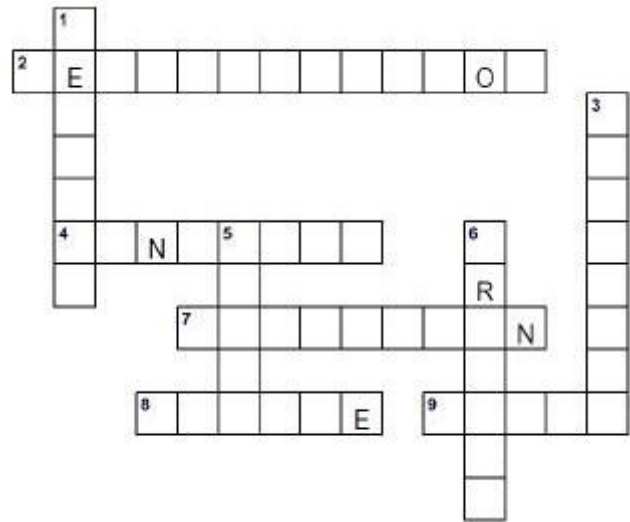
v) Which is the month with least number of days ? _____

Worksheet- E.V.S.

Name : _____ **Class:** _____ **Date:** _____

Q1. Using the Across and Down clues write the correct words in the numbered grid below.

LANDFILL	RECYCLE	PROTECT
PRESERVE	POLLUTION	FLOOD
REDUCE	REUSE	DEFORESTATION



ACROSS	DOWN
2. the act of cutting down or burning trees in a area.	1. to treat things that have already been used so they can be use again.
4. an area of land where large amount of waste material are buried under the Earth.	3. to keep safe from injury, harm or destruction.
7. something making land, water or air dirty.	5. a large number of water covering an areat hat is usually dry.
8. to make less rubbish.	6. to watch and help an animal or the environment.
9. to use something again.	

Q2 Write three things you did at home during winter break to save your' Mother Earth' from pollution.

--	--	--


Q3. Match the pictures with their suitable answer.

WAYS TO PREVENT POLLUTION



MATCH

1. Throw trash in the proper places.
2. Reuse bags and containers.
3. Eat organic food.
4. Don't buy products in aerosol spray cans.
5. Reduce , reuse and recycle
6. Use energy- saving light bulbs.
7. Plant more trees and vegetation.
8. Keep the volume of your T.V, music low.
9. Avoid burning trash
10. Biodegradable




ENGLISH

Prepare a booklet (scrap book) about the place you visited during the winter holidays. Also write a paragraph on your trip by answering the following questions :-

- i) Name of the place you visited.
- ii) Where is that place ?
- iii) How did you travel ?
- iv) Who all went with you?
- v) What did you see there ?
- vi) Paste pictures and photographs.

Paste pictures related to each question to make your project more creative in the scrapbook.



➤ ***Aim : is to enhance creative writing skills of the students.***

HINDI

प्र.1. अपने आस -पास या किसी बगीचे में एक पौधा लगाइए । पौधा लगाते समय का चित्र ए-4 साईज शीट पर चिपकाए व पौधा लगाकर आपको कैसा अनुभव हुआ उसका वर्णन 7-8 पंक्तियों में कीजिए ।

उद्देश्य – वातावरण के प्रति विद्यार्थियों में जागरूकता पैदा करना व उनके लेखनकार्य कुशलता को उत्कृष्ट बनाना ।

E.V.S.

Paste pictures of the Sun , the Moon and the stars in a scrapbook and write about them.

Also, paste pictures of different types of clouds. Make the project creative by using various things like cotton for clouds etc.

➤ *Aim : to keep a stepping stone towards their first learning about our Solar System*

MATHS

“Time is what we want the most, but what we use worst”. So, to teach our children the importance of time, they must take up first step to learn to read and know the time. With this aim let’s make it interesting learning for them by letting them make their very own simple clock using the old CD or with any of their creative idea to do so.



➤ *Aim : making students to know about the clock and learn to read the time.*

Name :

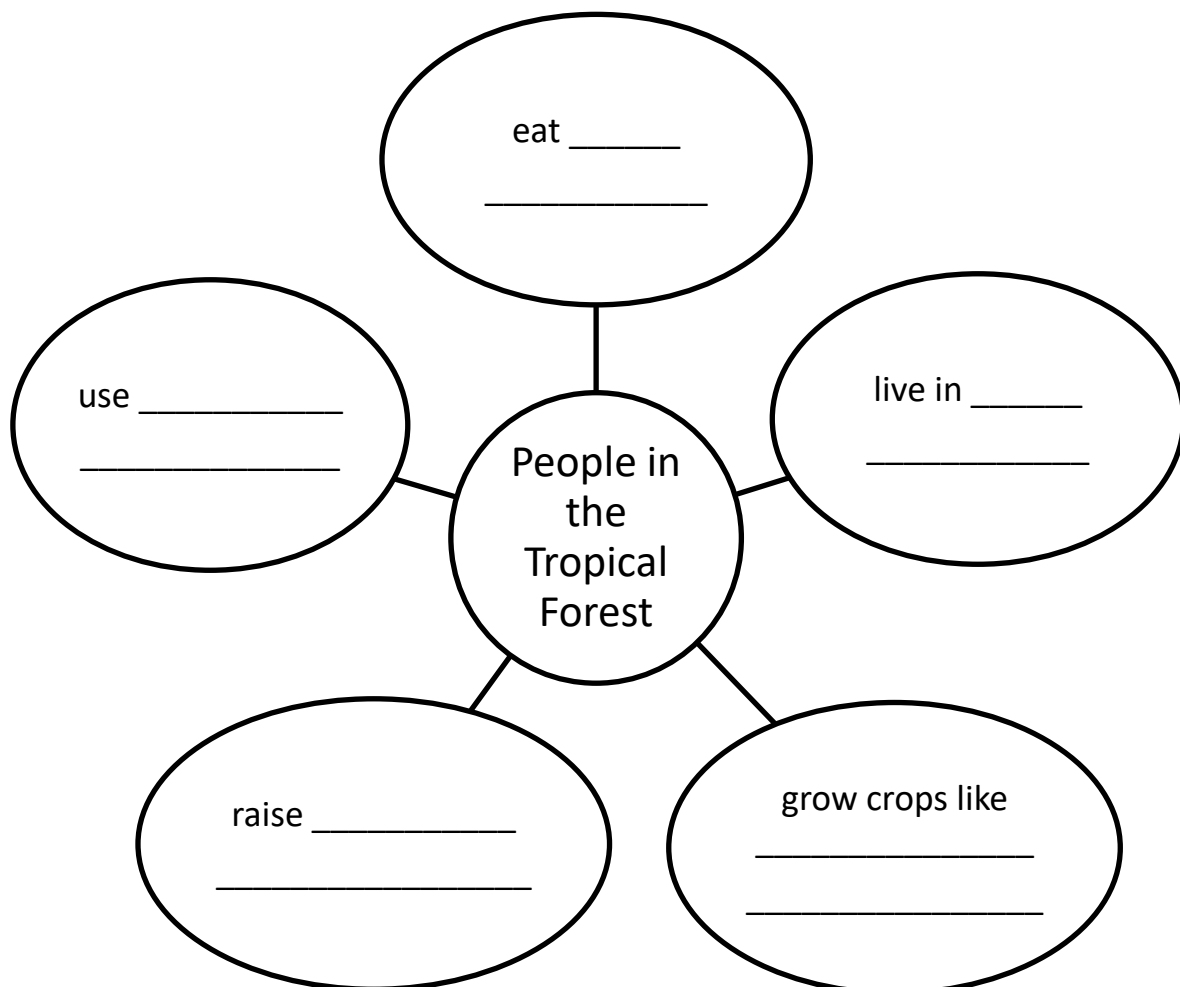
Class- V

Date:

Q.1. Complete the Sentences –

- a) The area near the Equator is also known as the _____.
- b) The tropical forest region lies between the Tropic of Cancer and the _____.
- c) Stilt houses protect people against _____.
- d) Two of the animals found in the tropical forests are _____ and _____.
- e) Tropical forest region gets heavy _____.
- f) The lowest layer in the forest is _____.
- g) _____ are called trees that rise above the canopy in a tropical forest.
- h) _____ is a place with hot and humid climate.

Q.2. Complete the word web with the information related to Tropical Forest.



Q.3. Write True or False for the following statements . Re-write the false statement correctly.

a) The prairies lie close to the Equator. _____

b) The forest of the Prairies grow in four layers. _____

c) Gorillas are found in the temperate Grassland. _____

d) Bisons are meat eating animals. _____

e) Farming is common in the Prairies. _____

Q. 4. On the physical world map mark-

A) Arctic tundra region

B) Temperate grassland of North America (prairies)



व्याकरण पुष् का पेज नं- 49 कीजिए ।

प्र.1. दिए गए चित्रों के दो-दो समानार्थी शब्द लिखिए -















प्र.2. निम्नलिखित शब्दों के विलोम शब्द लिखिए –

क) बड़ा –

ख) ऊपर –

ग) दिन –

घ) सच

ङ) अमीर –

च) कम –

छ) खुशबू –

ज) असली –

झ) मोटा –

ञ) हल्का –

ट) आज्ञा –

ठ) उधार –

ड) वीर –



